
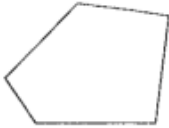
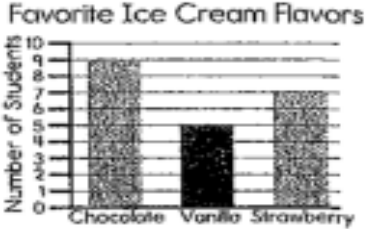



<p>1. $569 + 87 =$</p>	<p>2. $293 - 168 =$</p>								
<p>3. Corey has a meeting at the time shown on the clock. What time does Corey's meeting begin? _____</p> <div style="text-align: center;">  </div>	<p>4. Complete the table.</p> <table border="1" style="margin-left: auto; margin-right: auto; border-collapse: collapse; text-align: center;"> <tr> <th colspan="2">Subtract 40</th> </tr> <tr> <td style="padding: 5px;">175</td> <td style="width: 50px;"></td> </tr> <tr> <td style="padding: 5px;">131</td> <td></td> </tr> <tr> <td style="padding: 5px;">119</td> <td></td> </tr> </table>	Subtract 40		175		131		119	
Subtract 40									
175									
131									
119									
<p>5. Round the following numbers to the nearest 10.</p> <p>45 _____</p> <p>73 _____</p> <p>12 _____</p>	<p>6. What is the name of the following shape?</p> <p>_____</p> <div style="text-align: center;">  </div>								
<p>7. How many more students liked vanilla and strawberry than chocolate?</p> <p>_____</p> <div style="text-align: center;">  </div>	<p>8. Last week, Jessica bought 22 pounds of fruit at the grocery store. She bought apples, oranges, and bananas. If 6 pounds were apples and 9 pounds were bananas, how many pounds of oranges did Jessica buy?</p> <p>_____</p>								
<p>9. Round the following numbers to the nearest 100.</p> <p>359 _____</p> <p>363 _____</p> <p>229 _____</p>	<p>10. Draw hands on the clock to show 8:20.</p> <div style="text-align: center;">  </div>								

Math 4 Today Test # 4

Name: _____