

1. Dillon has 27 pencils to put into 9 boxes. If he puts the same number of pencils in each box, how many pencils should go in a box?

2. _____ \div 6 = 7

_____ \times 4 = 32

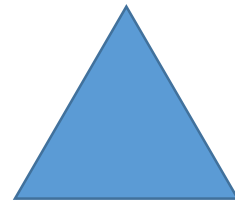
_____ \times 9 = 54

3. $70 \times 6 =$ _____

$50 \times 7 =$ _____

$90 \times 8 =$ _____

4. What is the perimeter of this shape if each side measures 8 inches?

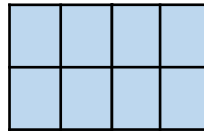


5. $4 \times 8 =$ _____

$7 \times 8 =$ _____

$40 \times 6 =$ _____

6. What is the area of the rectangle?




_____ Square units

7. About how much does a wading pool hold?

- a. 600grams
- b. 600 liters

8. Look at the clock. What time will it be in 35 minutes?



9. A car has four wheels. How many wheels do 9 cars have altogether?

10. How many more people liked pepperoni than mushroom pizza?

Favorite Pizza Toppings	
cheese	
mushroom	
sausage	
pepperoni	
Key	= 5 pizzas
