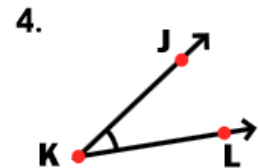
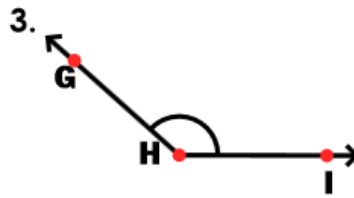
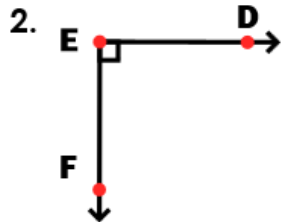
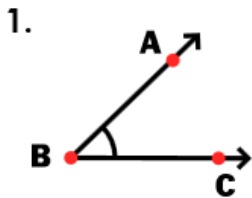




# Daily Review Examples Applying Math

## MONDAY

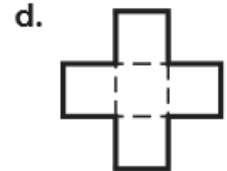
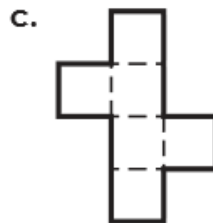
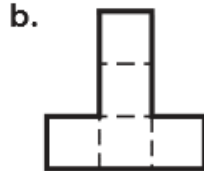
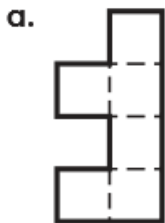
Label each angle as acute, obtuse, or right.



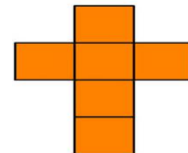
\_\_\_\_\_

## TUESDAY

1. Which figure forms a net for a cube?



2. Could this also be a net for a cube? Do you think there is more than one net for a cube? Why or Why not?



\_\_\_\_\_

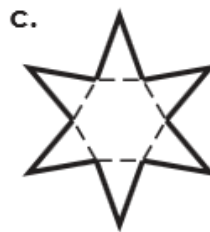
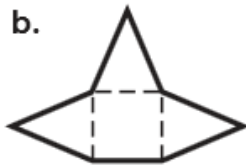
\_\_\_\_\_

# Woodruff Elementary

Dream Team

WEDNESDAY

Which figure forms a net for a rectangular pyramid?



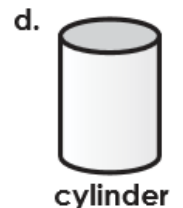
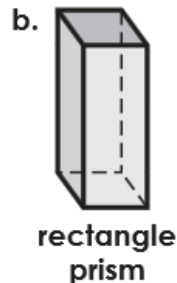

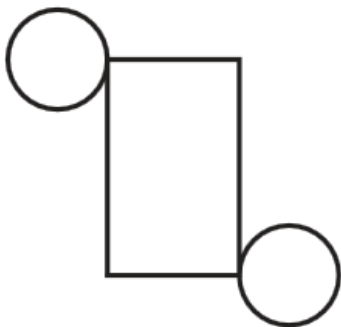
What is the base shape of a rectangular Pyramid?

---

---

THURSDAY

3. Which solid shape is made by the net pictured below?



What is a net? How does a net help you identify a shape?

---

---