

March 17

Name _____



Daily Review Examples Applying Math

MONDAY

PASS Testing

begins tomorrow!

Writing - Day 1
(Extended Response)

- *Get to bed early!
- *Eat a healthy breakfast!
- *Arrive at school on time!

TUESDAY

PASS Testing

Again tomorrow!

Writing - Day 2
(Multiple choice)

- *Get to bed early!
- *Eat a healthy breakfast!
- *Arrive at school on time!

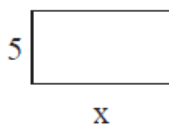
Woodruff Elementary

Dream Team

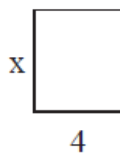
WEDNESDAY

Determine the length of the side marked as 'X'. The total perimeter of the quadrilateral is given.

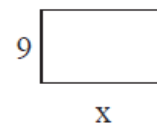
1) Perimeter = 30



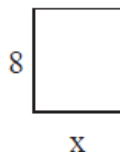
2) Perimeter = 18



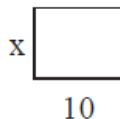
3) Perimeter = 32



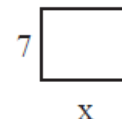
4) Perimeter = 28



5) Perimeter = 38



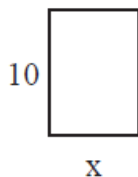
6) Perimeter = 30



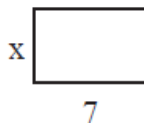
THURSDAY

Determine the length of the side marked as 'X'. The total perimeter of the quadrilateral is given.

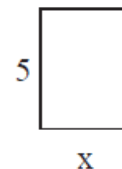
1) Perimeter = 28



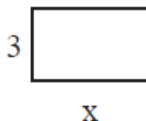
2) Perimeter = 26



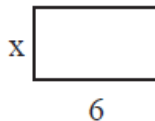
3) Perimeter = 14



4) Perimeter = 14



5) Perimeter = 16



6) Perimeter = 24

