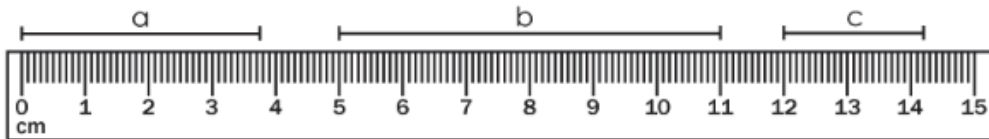




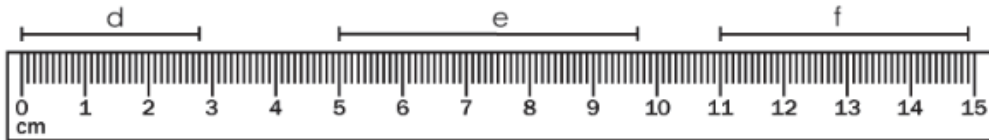
Daily Review Examples Applying Math

MONDAY

Measure each line segment using the ruler shown. Round to the nearest centimeter.

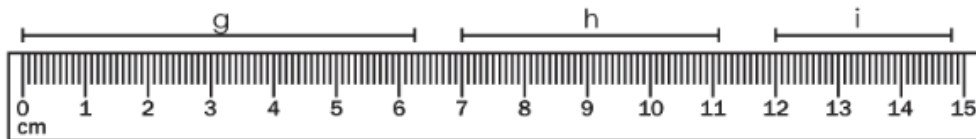


a = _____ b = _____ c = _____

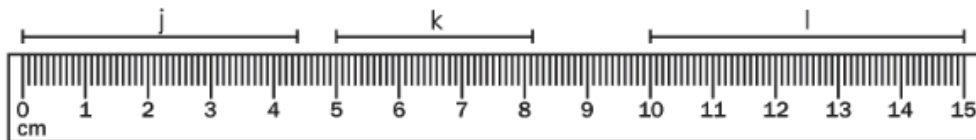


d = _____ e = _____ f = _____

TUESDAY




g = _____ h = _____ i = _____



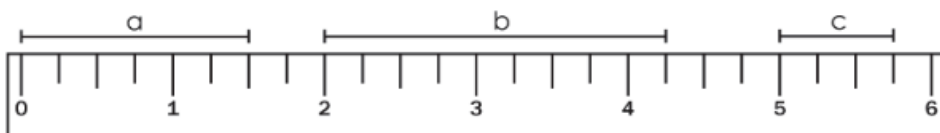
j = _____ k = _____ l = _____



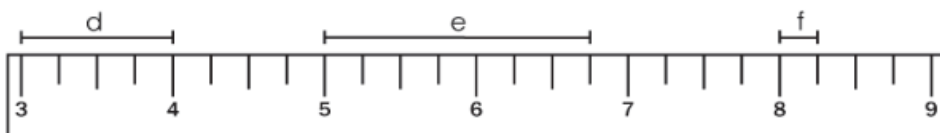


WEDNESDAY

Measure to the nearest $\frac{1}{4}$ inch for each line segment using the ruler shown.

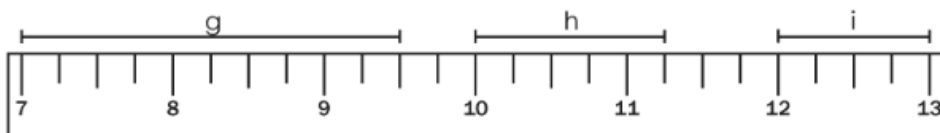


a = _____ b = _____ c = _____

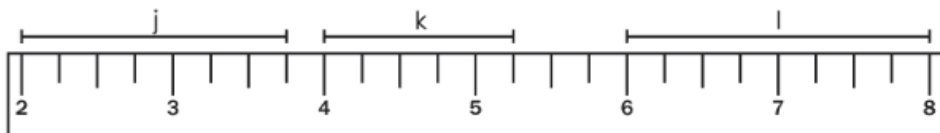


d = _____ e = _____ f = _____

THURSDAY



g = _____ h = _____ i = _____



j = _____ k = _____ l = _____