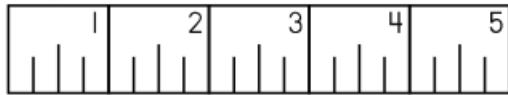




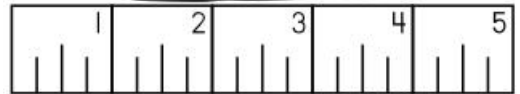

Daily Review Examples Applying Math

MONDAY

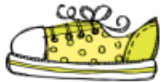
Measure each object to the nearest half inch



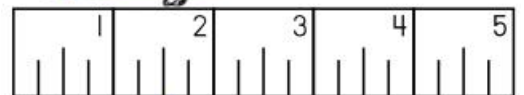

\_\_\_\_\_



\_\_\_\_\_



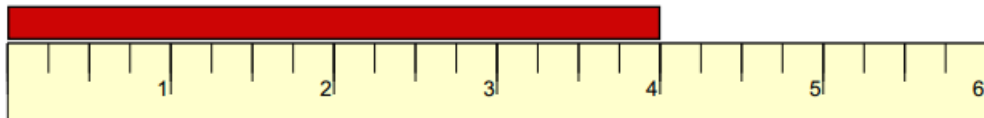
\_\_\_\_\_



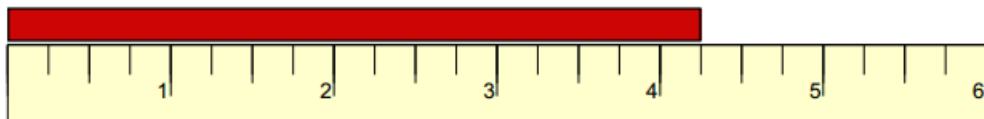
\_\_\_\_\_

TUESDAY

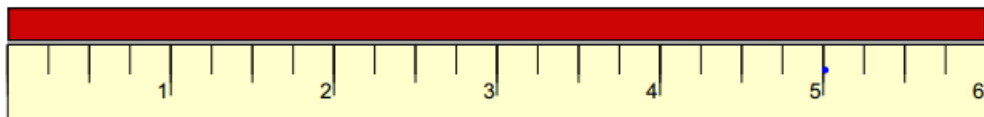
Measure each object to the nearest 1/4 inch



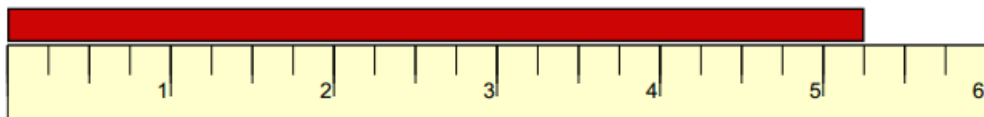
\_\_\_\_\_



\_\_\_\_\_



\_\_\_\_\_





\_\_\_\_\_

# Woodruff Elementary

Dream Team

WEDNESDAY

	X				
	X			X	
	X	X	X	X	
	X	X	X	X	X
	0	1	2	3	4
	Number of Pets				

How many students  
Have 2 or less pets?

\_\_\_\_\_


How many pets do the  
most students have?

\_\_\_\_\_

How many students have  
3 or more pets?

\_\_\_\_\_

THURSDAY

			X			
			X	X		
	X	X	X			X
X	X	X	X	X	X	
	2	3	4	5	6	7
	Number of Goals Scored this Season					

What is the difference between the  
greatest number of goals and the  
least number of goals?

\_\_\_\_\_

How many more students scored 5  
goals than 2 goals?

\_\_\_\_\_

How many goals did the most  
number of students make?

\_\_\_\_\_