



Daily Review Examples Applying Math

MONDAY



:



:




:



:



:



:

TUESDAY



:



:



:



:



:



:

Woodruff Elementary

Dream Team

WEDNESDAY

Linda had 24 liters of liquid. She wanted to partition it equally into 4 containers. What volume of liquid is in each container?

James is a farmer and sells his vegetables at a farmers market. He brought 64 kilograms of vegetables to the market. Jane bought 6 kilograms of potatoes, 1 ten kilogram pumpkin and 2 kilograms of green beans. How much food does the farmer have left?

Ashley has a book that weighs 32 grams, a pencil that weighs 5 grams and another book that weighs 40 grams. Her backpack can hold 80 grams. How many more grams does she have left to fill her backpack?

What unit would you use to measure the object?



grams, kilograms, or liters

What unit would you use to measure the object?



grams, kilograms, or liters

What unit would you use to measure the object?



grams, kilograms, or liters

THURSDAY

What unit would you use to measure the object?



grams, kilograms, or liters

What unit would you use to measure the object?



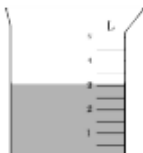
grams, kilograms, or liters

What unit would you use to measure the object?




grams, kilograms, or liters

Read the beaker and write the liquid volume.



Read the beaker and write the liquid volume.



Read the beaker and write the liquid volume.

