







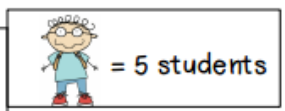


Daily Review Examples Applying Math

MONDAY

Students in Second Grade

teachers	Mrs. C	
	Ms. K	
	Mrs. L	
	Mrs. J	
	Ms. N	
	Ms. S	



- How many students are in Mrs. L's class?

- How many students are in Ms. S's class?





- How many more students are in Mrs. L's class than Ms. N's class?

- How many fewer students does Mrs. J have than Mrs. C?

- How many students are in Ms. S, Ms. K, and Mrs. J's class?

TUESDAY

Lost And Found

school supplies											
											
											
											
		2	4	6	8	10	12				

number of lost school supplies

- How many pencils were in the Lost and Found?

- How many more crayons than erasers were in the Lost and Found?

- How many fewer erasers than pencils were in the Lost and Found?

- How many crayons and pencils were in the Lost and Found?

- How many supplies were in the Lost and Found?




Woodruff Elementary

Dream Team

WEDNESDAY

Favorite Ice Cream Toppings



- How many people like chocolate sauce?

- Which topping is the least favorite?

- How many people like peanuts and M n M's?

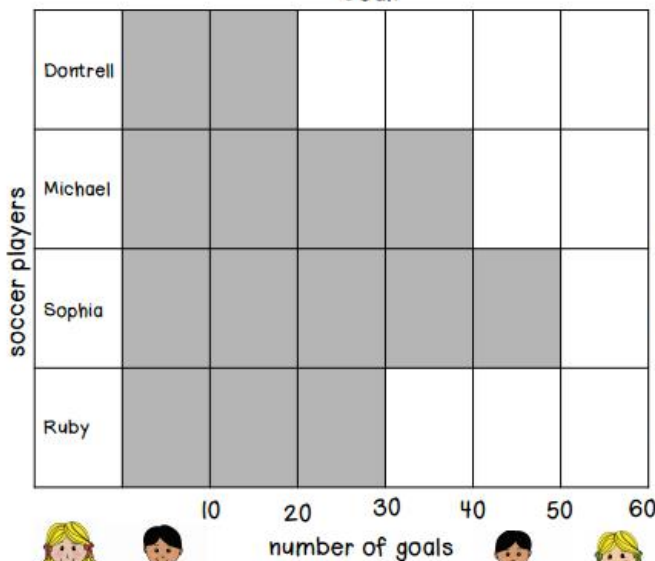
- How many fewer people like rainbow sprinkles than cherries?

- How many people like toppings on their ice cream?

- Write a sentence about M n M's and peanuts.

THURSDAY

Goal



- How many goals did Michael score?

- How many more goals did Sophia make than Dontrell?

- Who scored the fewest goals?

- How many more goals did Michael make than Ruby?

- How many fewer goals did Michael make than Sophia?

- How many goals did Michael and Ruby make?
