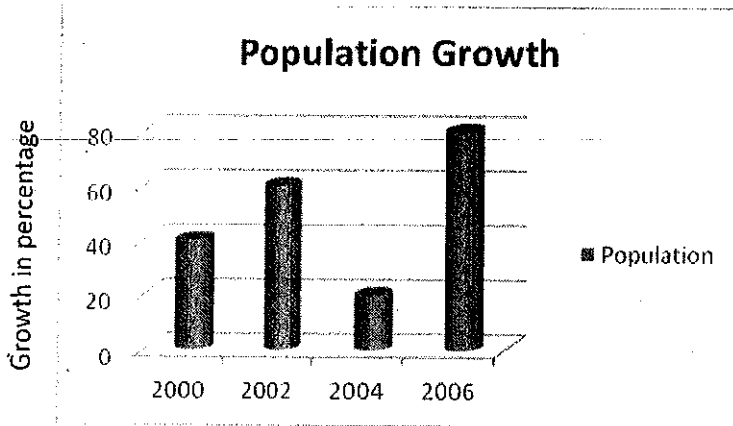


Woodruff Elementary

Dream Team

WEDNESDAY

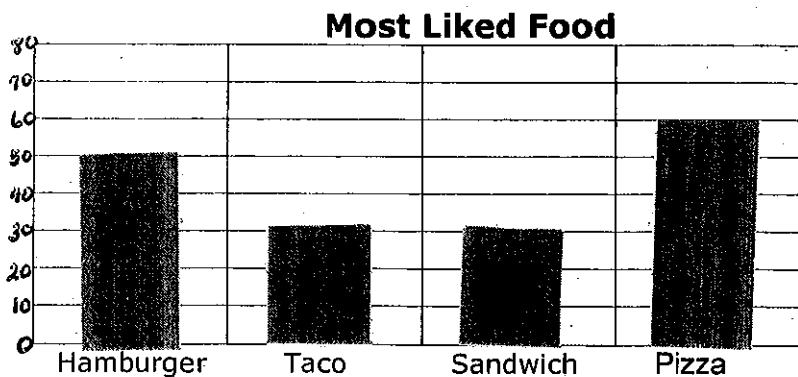
Use the graph to answer:



1. What is the population growth in the year 2002? _____
2. What is largest population growth?
3. What is population in the year 2000? _____
4. What is the least population growth? _____

THURSDAY

Read bar graph and answer the questions below.







- a. How many people answered the survey?
- b. How many more people like pizza than sandwiches?
- c. How many more people like Hamburgers than Tacos?
- d. Which two foods were equally as popular?



Daily Review Examples Applying Math

MONDAY

Burgers purchased by kids

Name	Number of Burgers
Jose	
Kylie	
Jessica	
Kevin	

Each burger icon represents 2 burgers

Answer the question on the basis of the pictograph above.

- 1 How many burgers did Jose purchase?
- 2 How many burgers did Kylie purchase?
- 3 How many burgers did Jessica purchase?

TUESDAY

Use the Picture Graph above to answer the questions below.

- 4 How many burgers did Kevin purchase?
- 5 Who purchased the most burgers?
- 6 Who purchased the least burgers?
- 7 Who purchased 8 burgers?
- 8 Who purchased 12 burgers?
- 9 Who purchased 4 burgers?