

Quick Check Homework

234

806

598

566

756

121

+785

-453

-340

+499

-490

+567

905

700

344

234

834

341

+654

-156

-38

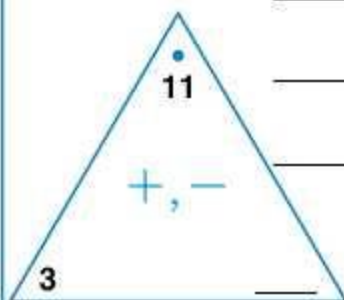
+785

-478

-218


**LESSON**  
**2•2**
**Math Boxes**

1. Complete the Fact Triangle. Write the fact family.



$$\underline{\quad} + \underline{\quad} = \underline{\quad}$$

$$\underline{\quad} + \underline{\quad} = \underline{\quad}$$

$$\underline{\quad} - \underline{\quad} = \underline{\quad}$$

$$\underline{\quad} - \underline{\quad} = \underline{\quad}$$



2. Choose the best answer.

The school chorus has 28 second graders and 34 third graders. How many children are in the chorus?

52 children     14 children

12 children     62 children

3. Use your calculator. Write the answers in dollars and cents.

$$\$0.85 + 53\text{c} = \underline{\hspace{2cm}}$$


$$\$2.08 + \$5.01 = \underline{\hspace{2cm}}$$

$$64\text{c} + \$1.73 = \underline{\hspace{2cm}}$$

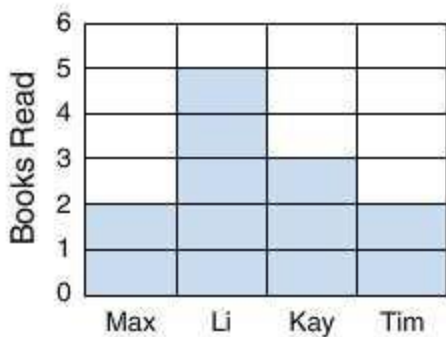
$$37\text{c} + 26\text{c} = \underline{\hspace{2cm}}$$

4. Find the rule. Fill in the empty frames.

**Rule**



5. The mode for the number of books read is \_\_\_\_\_.



6. Write these units of measure in order from smallest to largest.

mile \_\_\_\_\_ ← smallest

foot \_\_\_\_\_

yard \_\_\_\_\_

inch \_\_\_\_\_ ← largest

