
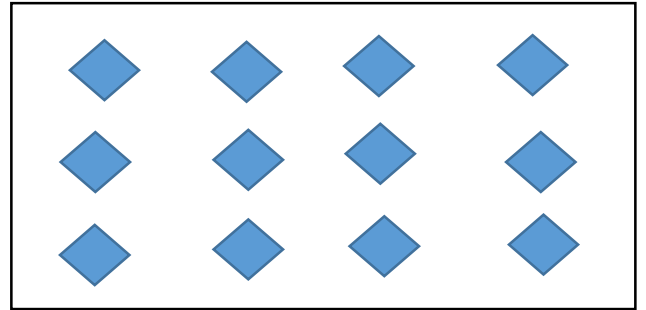


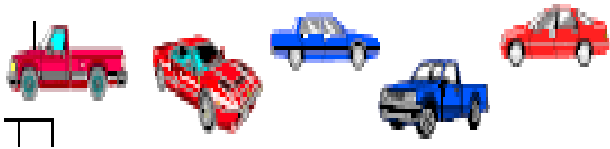
Core Bites Study Guide #4



1. What multiplication sentence is shown?



2. What fraction of the vehicles are cars?

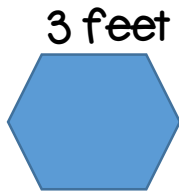


3.
$$\begin{array}{r} 20 \\ \times 7 \\ \hline \end{array}$$

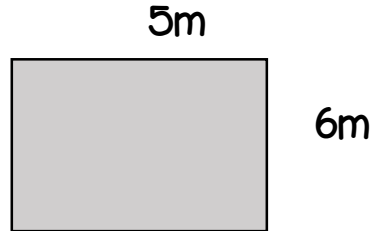
4.
$$\begin{array}{r} 30 \\ \times 6 \\ \hline \end{array}$$

5. Round each to the nearest ten. (a) 497 (b) 333 (c) 98

6. What is the perimeter of the hexagon if each side measures 3 inches?



7. What is the area of the shape?



8. Which shape is described?

A quadrilateral with congruent sides.

9. If Macy takes 8 minutes to make a bracelet, how long will it take for her to make 10 bracelets?

10. True or False: All parallelograms are quadrilaterals.