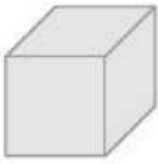


Name: _____

Monday HW

Solid Figures



Cube



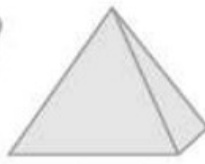
Sphere



Cylinder



Cone



Pyramid




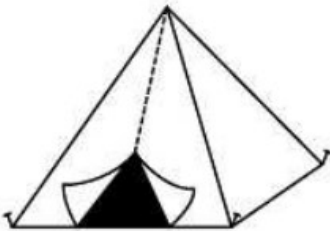
Rectangular Prism


Write the name of the solid figure that each object looks like.





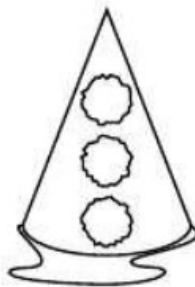












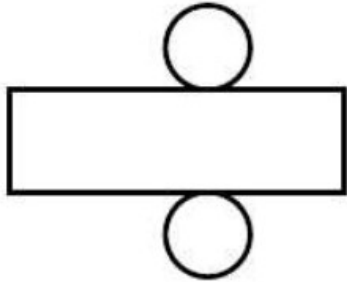


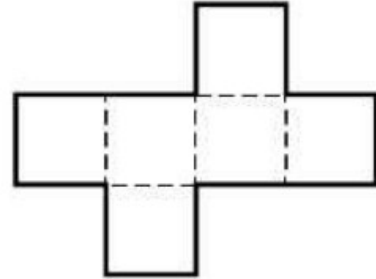
***Be sure to do the back!**


Name: _____

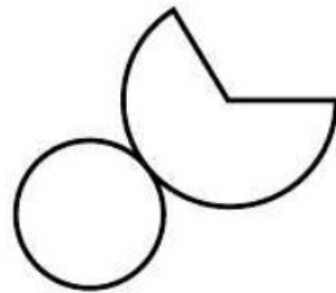
Nets

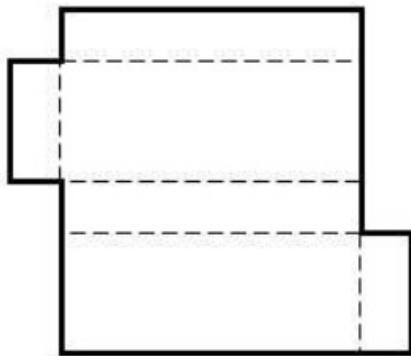
What solid shape does each net make?

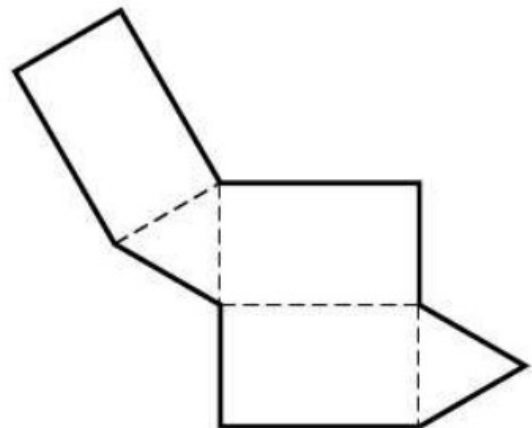












Name: _____

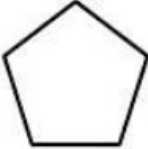
Tuesday HW

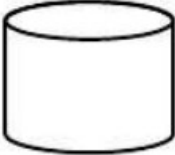
Solids and Polygons

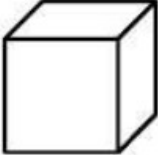
Write the name of each shape.

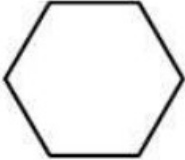
Word Box
(You will not use all of the words)

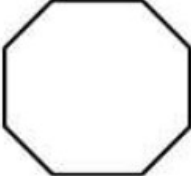
cylinder	rectangular prism	cube	sphere
octagon	pentagon	hexagon	rectangle
parallelogram	triangle	square	trapezoid


1. 


2. 


3. 

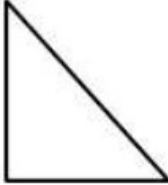
4. 

5. 

6. 

7. 

8. 

9. 

Name: _____

Solids

Word Box

cube	sphere	four
pyramid	solid	six
cylinder	vertex	eight
cone	faces	ten
rectangular prism	edge	twelve



Choose a word from the box to correctly answer each question.
Some words will be used more than once. Some words will not be used at all.

1. A box of cereal is shaped like which solid? _____
2. A can of soup is shaped like which solid? _____
3. An orange is shaped like which solid? _____
4. A glue stick is shaped like which solid? _____
5. Your math book is shaped like which solid? _____
6. A die is shaped like which solid? _____
7. What are the flat surfaces on a pyramid, cube, or rectangular prism called? _____
8. What is the name of the place on a solid where two faces meet? _____
9. What is the name of a corner on a solid where three or more edges meet? _____
10. How many faces does a rectangular prism have? _____
11. How many vertices does a rectangular prism have? _____
12. How many edges does a rectangular prism have? _____